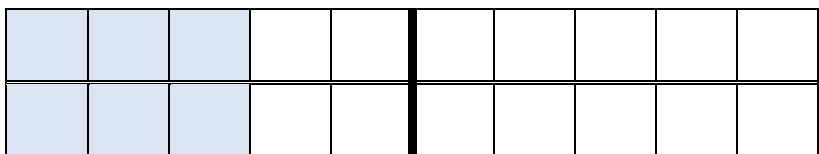



ARBEITSBLATT NUMMER
1

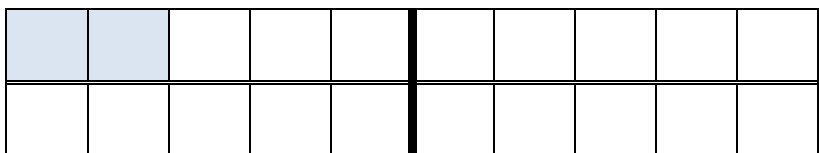
Verdoppeln




$3 + 3 = \underline{\quad}$



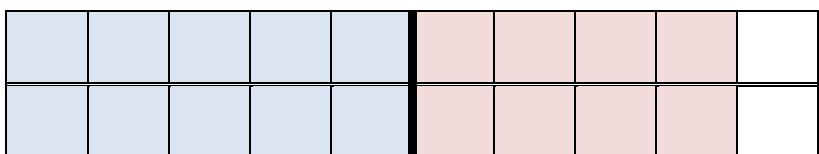
$5 + 5 = \underline{\quad}$



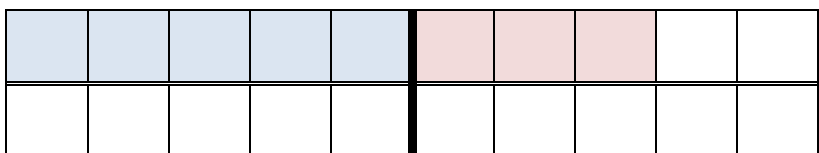
$2 + 2 = \underline{\quad}$



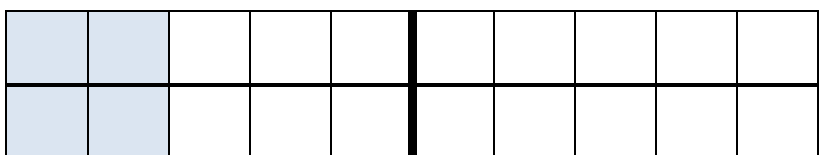
$7 + 7 = \underline{\quad}$



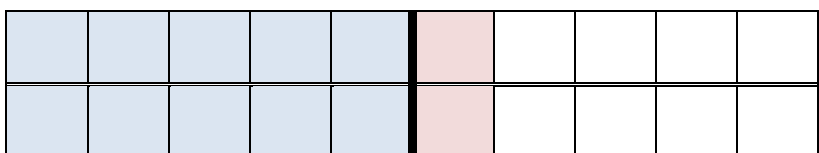
$9 + 9 = \underline{\quad}$



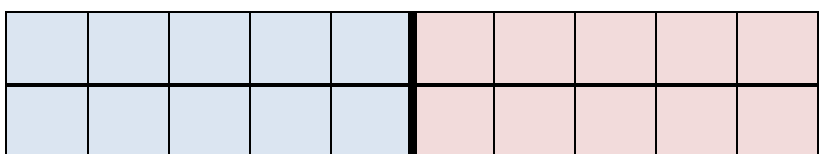
$8 + 8 = \underline{\quad}$



$\underline{\quad} + \underline{\quad} = \underline{\quad}$



$\underline{\quad} + \underline{\quad} = \underline{\quad}$




$\underline{\quad} + \underline{\quad} = \underline{\quad}$

ARBEITSBLATT NUMMER
2

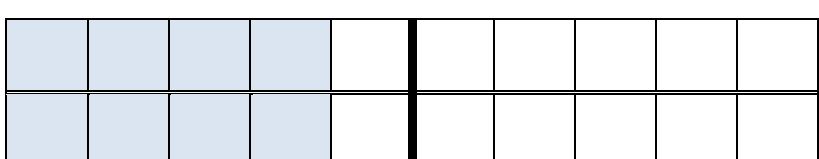
Halbieren



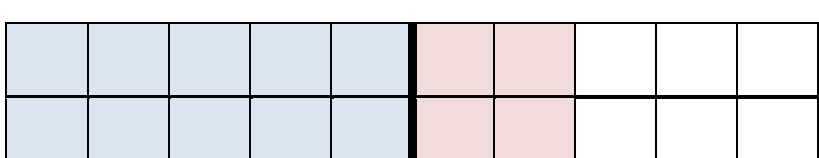
Insgesamt: ____
Hälfte: ____



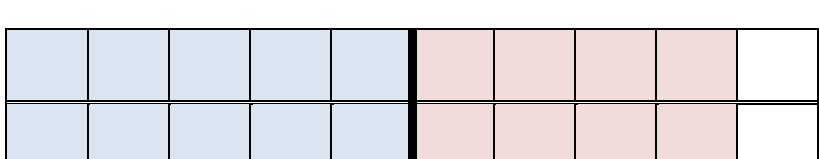
Insgesamt: ____
Hälfte: ____



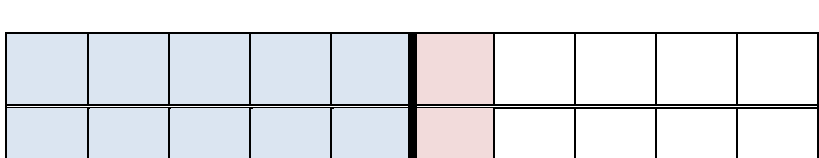
Insgesamt: ____
Hälfte: ____



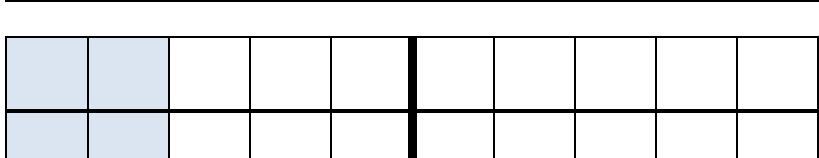
Insgesamt: ____
Hälfte: ____



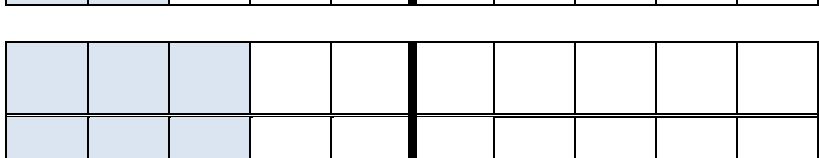
Insgesamt: ____
Hälfte: ____



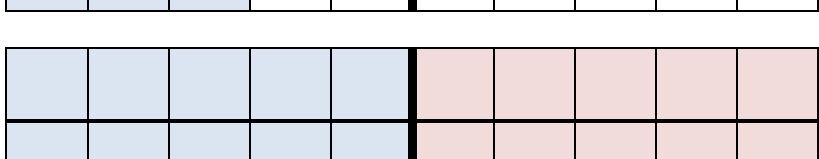
Insgesamt: ____
Hälfte: ____



Insgesamt: ____
Hälfte: ____



Insgesamt: ____
Hälfte: ____



Insgesamt: ____
Hälfte: ____

ARBEITSBLATT NUMMER
3

Verdoppeln und Halbieren



VERDOPPELE	
3	
7	
5	
2	
8	
4	
6	
9	
1	
10	
7	
5	
6	

HALBIERE!	
6	
8	
16	
20	
4	
10	
18	
12	
16	
2	
14	
12	
8	

Du hast nur
5 Minuten
Zeit!

