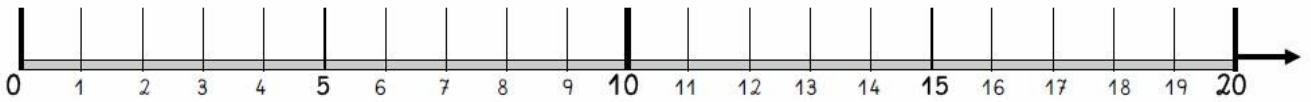
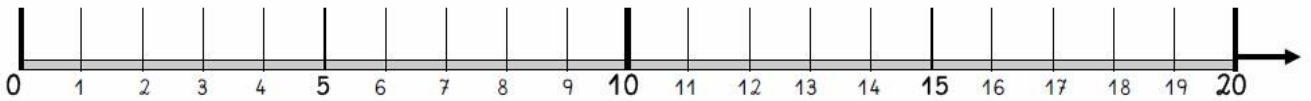




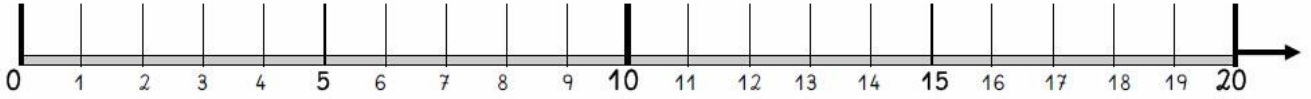
# Zeige auf dem Zahlenstrahl!



$$3 + 6 = \underline{\quad}$$

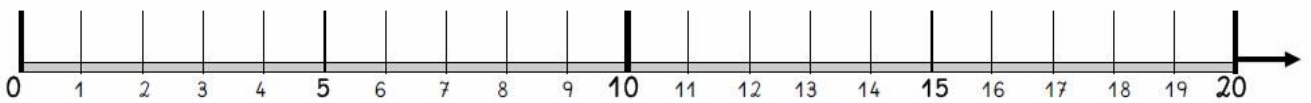


$$11 + 5 = \underline{\quad}$$



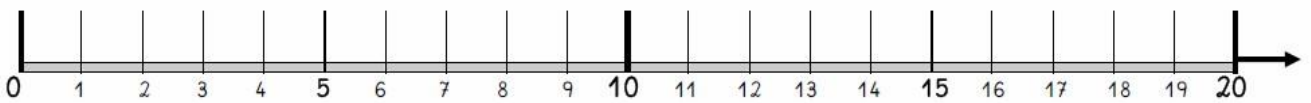
$$5 + 3 = \underline{\quad}$$

$$15 + 3 = \underline{\quad}$$



$$2 + 4 = \underline{\quad}$$

$$12 + 4 = \underline{\quad}$$

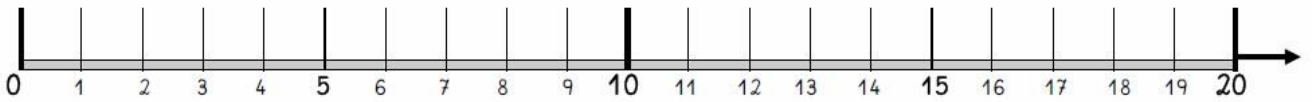


$$4 + 2 = \underline{\quad}$$

$$14 + 2 = \underline{\quad}$$

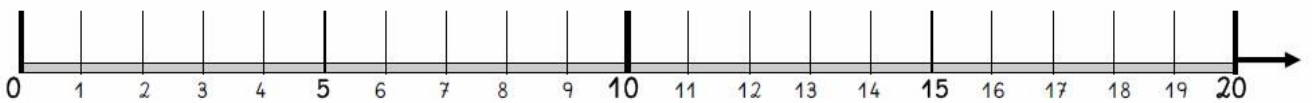


# Zeige auf dem Zahlenstrahl!



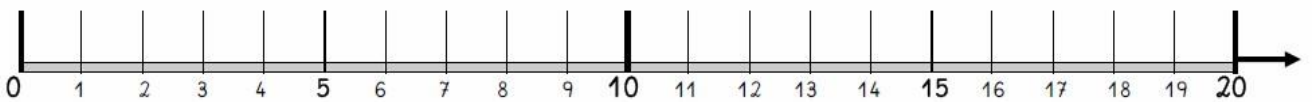
$5 + 3 = \underline{\quad}$

$15 + 3 = \underline{\quad}$



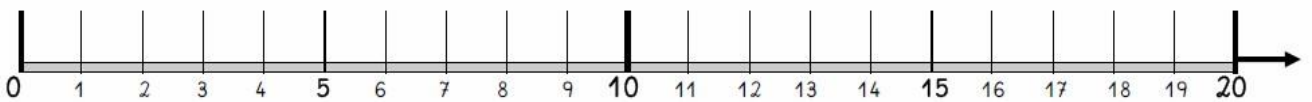
$3 + 5 = \underline{\quad}$

$13 + 5 = \underline{\quad}$



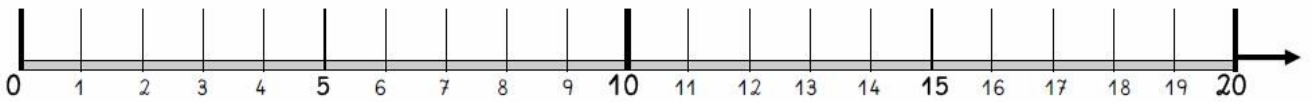
$6 + 2 = \underline{\quad}$

$16 + 2 = \underline{\quad}$

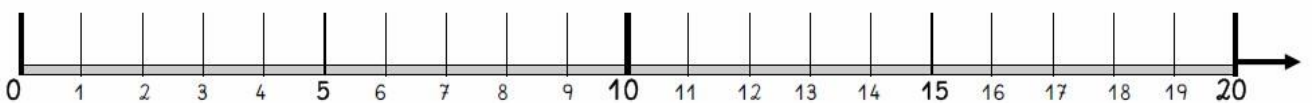


$4 + 5 = \underline{\quad}$

$14 + 5 = \underline{\quad}$



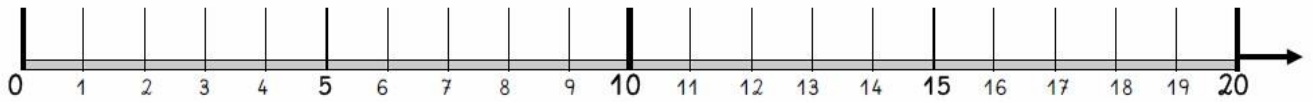
$8 + 4 = \underline{\quad}$



$7 + 6 = \underline{\quad}$

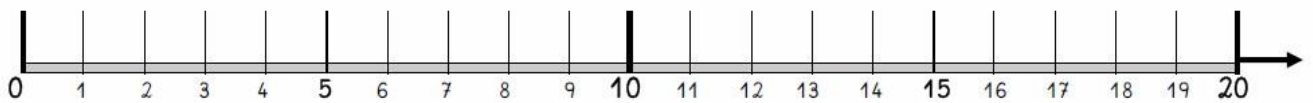


# Zeige auf dem Zahlenstrahl!



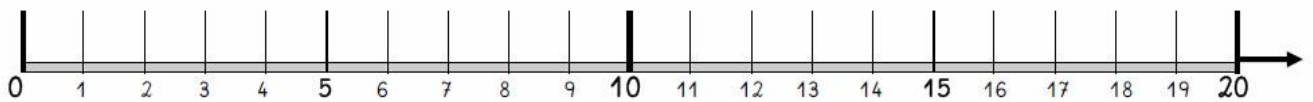
$$3 + 6 = \underline{\quad}$$

$$13 + 6 = \underline{\quad}$$

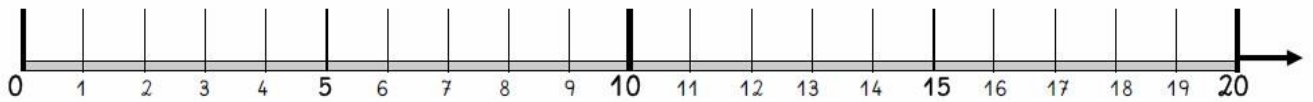


$$4 + 5 = \underline{\quad}$$

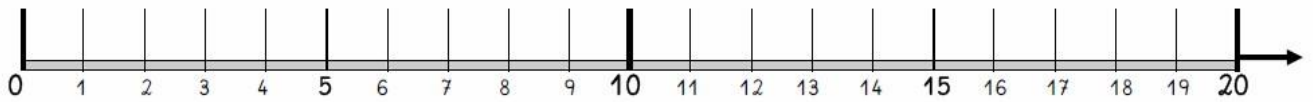
$$14 + 5 = \underline{\quad}$$



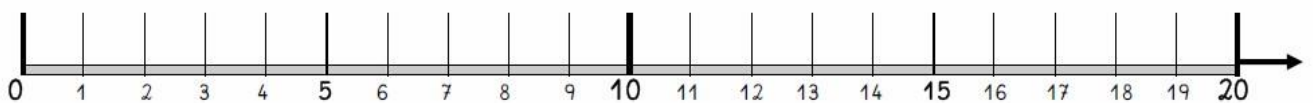
$$6 + 5 = \underline{\quad}$$



$$8 + 6 = \underline{\quad}$$



$$7 + \underline{\quad} = 12$$



$$\underline{\quad} + 5 = 11$$